

### Solutions Class 9 Surface Area And Volume Of Sphere Exercise 21.1

RD Sharma Solutions Class 9 Chapter 21 Exercise 21.1

**Q1. Find the surface area of a sphere of radius:**

**(i) 10.5cm (ii) 5.6cm (iii) 14cm**

**Sol.**

**(i) Given Radius= 10.5 cm**

$$\begin{aligned}\text{Surface area} &= 4\pi r^2 \\ &= 4 \times \frac{22}{7} \times (10.5)^2 \\ &= 1386 \text{ cm}^2\end{aligned}$$

(ii) Given radius = 5.6 cm

$$\begin{aligned}\text{Surface area} &= 4\pi r^2 \\ &= 4 \times \frac{22}{7} \times (5.6)^2 \\ &= 394.24 \text{ cm}^2\end{aligned}$$

(iii) Given radius = 14 cm

$$\begin{aligned}\text{Surface area} &= 4\pi r^2 \\ &= 4 \times \frac{22}{7} \times (14)^2 \\ &= 2464 \text{ cm}^2\end{aligned}$$

**Q2. Find the surface area of a sphere of diameter:**

(i) 14 cm (ii) 21 cm (iii) 3.5 cm

**Sol.**

(i) Given Diameter = 14 cm

$$\text{Radius} = \frac{\text{Diameter}}{2}$$

$$= \frac{14}{2} = 7 \text{ cm}$$

$$\text{Surface area} = 4\pi r^2$$

$$= 4 \times \frac{22}{7} \times (7)^2$$

$$= 616 \text{ cm}^2$$

(ii) Given Diameter = 21 cm

$$\text{Radius} = \frac{\text{Diameter}}{2}$$

$$= \frac{21}{2} = 10.5 \text{ cm}$$

$$\text{Surface area} = 4\pi r^2$$

$$= 4 \times \frac{22}{7} \times (10.5)^2$$

$$= 1386 \text{ cm}^2$$

(iii) Given diameter = 3.5 cm

$$\text{Radius} = \frac{\text{Diameter}}{2}$$

$$= \frac{3.5}{2} = 1.75 \text{ cm}$$

$$\text{Surface area} = 4\pi r^2$$

$$= 4 \times \frac{22}{7} \times (1.75)^2$$

$$= 38.5 \text{ cm}^2$$

**Q3. Find the total surface area of a hemisphere and a solid hemisphere each of radius 10 cm ( $\pi = 3.14$ )**

**Sol.**

$$\text{The surface area of the hemisphere} = 2\pi r^2$$

$$= 2 \times 3.14 \times (10)^2$$

$$= 628 \text{ cm}^2$$

The surface area of solid hemisphere=  $2\pi r^2$

$$= 3 \times 3.14 \times (10)^2$$

$$= 942 \text{ cm}^2$$

**Q4. The surface area of a sphere is  $5544 \text{ cm}^2$ , find its diameter.**

**Sol.**

Surface area of a sphere is  $5544 \text{ cm}^2$

$$4\pi r^2 = 5544$$

$$4 \times 3.14 \times (r)^2 = 5544$$

$$r^2 = \frac{5544 \times 7}{88}$$

$$r = \sqrt{21 \text{ cm} \times 21 \text{ cm}}$$

$$r = 21 \text{ cm}$$

$$\text{Diameter} = 2 (\text{radius})$$

$$= 2 (21) = 42 \text{ cm}$$

**Q5. A hemispherical bowl made of brass has inner diameter 10.5cm. Find the cost of tin plating it on the inside at the rate of Rs.4 per  $100 \text{ cm}^2$ .**

**Sol.**

Inner diameter of hemispherical bowl= 10.5cm

$$\text{Radius} = \frac{10.5}{2} = 5.25 \text{ cm}$$

Surface area of hemispherical bowl=  $2\pi r^2$

$$= 2 \times 3.14 \times (5.25)^2$$

$$= 173.25 \text{ cm}^2$$

Cost of tin plating  $100 \text{ cm}^2$  area= Rs.4

Cost of tin plating  $173.25 \text{ cm}^2$  area= Rs.  $\frac{4 \times 173.25}{100}$  = Rs. 6.93

Thus, the cost of tin plating the inner side of hemispherical bowl is Rs.6.93

**Q6. The dome of a building is in the form of a hemisphere. Its radius is 63dm. Find the cost of painting it at the rate of Rs.2 per sq m.**

**Sol.**

Dome radius= 63dm= 6.3m



Inner surface area of dome=  $2\pi r^2$

$$= 2 \times 3.14 \times (6.3)^2$$

$$= 249.48 \text{ m}^2$$

Now, cost of  $1 \text{ m}^2$  = Rs.2

Therefore cost of  $249.48 \text{ m}^2$  = Rs.  $(249.48 \times 2)$  = Rs.498.96

**Q7. Assuming the earth to be a sphere of radius 6370km, how many square kilometers is the area of the land if three-fourths of the earth's surface is covered by water?**

**Sol.**

$\frac{3}{4}$  <sup>th</sup> of earth surface is covered by water

Therefore  $\frac{1}{4}$  <sup>th</sup> of earth surface is covered by land

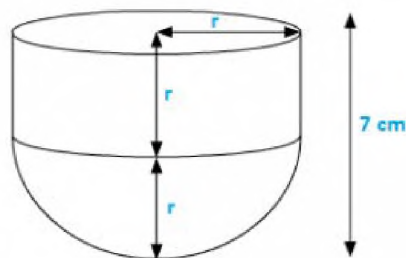
Therefore Surface area covered by land =  $\frac{1}{4} \times 4\pi r^2$

$$= \frac{1}{4} \times 4 \times \frac{22}{7} \times (6370)^2$$

$$= 127527400 \text{ km}^2$$

**Q8. A cylinder of same height and radius is placed on top of a hemisphere. Find the curved surface area of the shape if the length of the shape is 7cm.**

**Sol.**



Given length of the shape = 7cm

But length = r + r

$$2r = 7 \text{ cm}$$

$$r = 3.5 \text{ cm}$$

Also; h = r

$$\text{Total surface area of shape} = 2\pi r h + 2\pi r^2$$

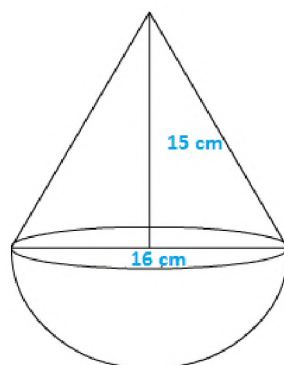
$$= 2\pi r r + 2\pi r^2$$

$$= 2\pi r^2 + 2\pi r^2$$

$$= 4 \times \frac{22}{7} \times (3.5)^2 = 154 \text{ cm}^2$$

**Q9. A wooden toy is in the form of a cone surmounted on a hemisphere. The diameter of the base of the cone is 16cm and its height is 15cm. Find the cost of painting the toy at Rs.7 per  $100 \text{ cm}^2$**

**Sol.**



Diameter of cone= 16cm

Radius of cone= 8cm

Height of cone= 15cm

Slant height of cone=  $\sqrt{8^2 + 15^2}$

$$= \sqrt{64 + 225}$$

$$= \sqrt{289} = 17\text{cm}$$

Therefore Total curved surface area of toy

$$= \pi r l + 2\pi r^2$$

$$= \frac{22}{7} \times 8 \times 17 + 2 \times \frac{22}{7} \times 8^2$$

$$= \frac{5808}{7} \text{cm}^2$$

Now, cost of  $100\text{cm}^2 = \text{Rs. } 7$

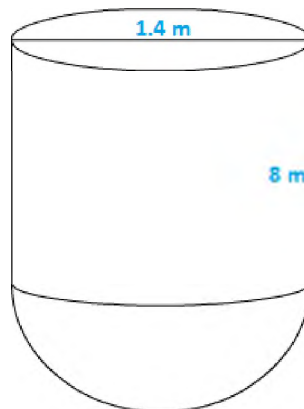
$$1\text{cm}^2 = \text{Rs. } \frac{7}{100}$$

$$\text{Hence cost of } \frac{5808}{7} \text{cm}^2 = \text{Rs. } \frac{5808}{7} \times \frac{7}{100}$$

$$= \text{Rs. } 58.08$$

**Q10. a storage tank consists of a circular cylinder with a hemisphere adjoined on either end. If the external diameter of the cylinder be 1.4m and its length is 8m, find the cost of painting it on the outside at the rate of Rs.10 per  $\text{m}^2$ .**

**Sol.**



Diameter of a cylinder= 1.4m

Therefore radius of cylinder=  $\frac{1.4}{2} = 0.7\text{m}$

Height of cylinder= 8m

Therefore surface area of tank=  $2\pi r h + 2\pi r^2$

$$= 2 \times \frac{22}{7} \times 0.7 \times 8 + 2 \times \frac{22}{7} \times (0.7)^2$$

$$= \frac{176}{5} + \frac{77}{25} = 38.28\text{m}^2$$

Now cost of  $1\text{m}^2 = \text{Rs. } 10$

Therefore cost of  $38.28\text{m}^2 = \text{Rs. } 382.80$

**Q11. The diameter of the moon is approximately one-fourth of the diameter of the earth. Find the ratio of their surface areas.**

**Sol.**

Let the diameter of the earth be d

Then,

Diameter of moon will be  $\frac{d}{4}$

Radius of earth =  $\frac{d}{2}$

Radius of moon =  $\frac{\frac{d}{2}}{4} = \frac{d}{8}$

Surface area of moon =  $4\pi\left(\frac{d}{8}\right)^2$

Surface area of earth =  $4\pi\left(\frac{d}{2}\right)^2$

Required ratio =  $\frac{4\pi\left(\frac{d}{8}\right)^2}{4\pi\left(\frac{d}{2}\right)^2}$

$$= \frac{4}{64} = \frac{1}{16}$$

Thus the required ratio of the surface areas is  $\frac{1}{16}$

**Q12.** A hemispherical dome of a building needs to be painted. If the circumference of the base of the dome is 17.6cm, find the cost of painting it, given the cost of painting is Rs.5 per  $100cm^2$

**Sol.**

Given that only the rounded surface of the dome to be painted, we would need to find the curved surface area of the hemisphere to know the extent of painting that needs to be done.

Now, circumference of the dome = 17.6cm

Therefore  $2\pi r = 17.6$

$$2 \times \frac{22}{7} \times r = 17.6m$$

So, the radius of the dome =  $2\pi r^2$

$$= 2 \times \frac{22}{7} \times 2.8 \times 2.8$$

$$= 49.28m^2$$


Cost of painting  $100cm^2$  is Rs.5

So, the cost of painting  $1m^2$  = Rs.500

Therefore the cost of painting the whole dome = Rs.  $500 \times 49.28$

$$= \text{Rs. } 24640$$

**Q13.** The front compound wall of a house is decorated by wooden spheres of diameter 21 cm, placed on small supports as shown in the figure. Eight such spheres are used for this purpose and are to be painted silver. Each support is a cylinder of radius 1.5cm and height 7cm and is to be painted black. Find the cost of paint required if silver paint costs 25 paise per  $cm^2$ .



**Sol.**

Wooden sphere radius =  $\frac{21}{2} = 10.5cm$

Surface area of a wooden sphere =  $4\pi r^2 = 4 \times \frac{22}{7} \times (10.5)^2 = 1386cm^2$

Radius r of cylindrical support = 1.5cm

Height h of cylindrical support = 7cm

Curved surface area of cylindrical support=

$$2\pi rh = 2 \times \frac{22}{7} \times 1.5 \times 7$$

$$= 66cm^2$$

$$\text{Area of circular end of cylindrical support} = \pi r^2 = \frac{22}{7} \times (1.5)^2 = 7.07cm^2$$

Area to be painted silver=

$$8 (1386 - 7.07) cm^2$$

$$= 8 (1378.93) cm^2$$

$$= 11031.44cm^2$$

$$\text{Cost occurred in painting silver colour} = (11034.44 \times 0.25) = Rs.2757.86$$

$$\text{Area to be painted black} = (8 \times 66) cm^2 = 528cm^2$$

$$\text{Cost occurred in painting black colour} = (528 \times 5.05) = Rs.26.40$$

$$\text{Therefore total cost in painting} = Rs.2757.86 + Rs.26.40 = Rs.2784.26$$

### Solutions Class 9 Surface Area And Volume Of Sphere Exercise 21.2

RD Sharma Solutions Class 9 Chapter 21 Exercise 21.2

**Q1. Find the volume of a sphere whose radius is: (i) 2 cm (ii) 3.5 cm (iii) 10.5 cm.**

**Sol.**

**(i) Radius( $r$ ) = 2 cm**

Therefore volume =  $\frac{4}{3}\pi r^3$

$$= \frac{4}{3} \times \frac{22}{7} \times (2)^3$$

$$= 33.52 \text{ cm}^3$$



(ii) Radius(r)= 3.5cm

$$\text{Therefore volume} = \frac{4}{3} \pi r^3$$

$$= \frac{4}{3} \times \frac{22}{7} \times (3.5)^3 = 179.666 \text{ cm}^3$$

(iii) Radius(r)= 10.5cm

$$\text{Therefore volume} = \frac{4}{3} \pi r^3$$

$$= \frac{4}{3} \times \frac{22}{7} \times (10.5)^3 = 4851 \text{ cm}^3$$

**Q2. Find the volume of a sphere whose diameter is: (i) 14 cm (ii) 3.5 dm (iii) 2.1 m**

**Sol.**

(i) Diameter=14cm, Radius(r)=  $\frac{14}{2} = 7\text{cm}$

$$\text{Therefore volume} = \frac{4}{3} \pi r^3$$

$$= \frac{4}{3} \times \frac{22}{7} \times (7)^3 = 1437.33 \text{ cm}^3$$

(ii) Diameter=3.5dm, Radius(r)=  $\frac{3.5}{2} = 1.75\text{dm}$

$$\text{Therefore volume} = \frac{4}{3} \pi r^3$$

$$= \frac{4}{3} \times \frac{22}{7} \times (1.75)^3$$

$$= 22.46 \text{ dm}^3$$

(iii) Diameter=2.1m, Radius(r)=  $\frac{2.1}{2} = 1.05\text{m}$

$$\text{Therefore volume} = \frac{4}{3} \pi r^3$$

$$= \frac{4}{3} \times \frac{22}{7} \times (1.05)^3 = 4.851 \text{ m}^3$$

**Q3. A hemispherical tank has the inner radius of 2.8 m. Find its capacity in liters.**

**Sol.**

Radius of the tank= 2.8m

$$\text{Therefore Capacity} = \frac{2}{3} \pi r^3$$

$$= \frac{2}{3} \times \frac{22}{7} \times (2.8)^3 = 45.994 \text{ m}^3$$

$$1 \text{ m}^3 = 1000 \text{ l}$$

Therefore capacity in litres = 45994 litres

**Q4. A hemispherical bowl is made of steel 0.25 cm thick. The inside radius of the bowl is 5 cm. Find the volume of steel used in making the bowl.**

**Sol.**

Inner radius = 5cm

Outer radius = 5 + 0.25 = 5.25

Volume of steel used= Outer volume-Inner volume

$$= \frac{2}{3} \times \pi \times \left( (5.25)^3 - (5)^3 \right)$$

$$= \frac{2}{3} \times \frac{22}{7} \times \left( (5.25)^3 - (5)^3 \right)$$

$$= 41.282 \text{ cm}^3$$

**Q5. How many bullets can be made out of a cube of lead, whose edge measures 22 cm, each bullet being 2 cm in diameter?**

**Sol.**

Cube edge= 22cm

$$\text{Therefore volume of the cube} = (22)^3 = 10648 \text{ cm}^3$$

And,

Volume of each bullet=

$$\frac{4}{3} \pi r^3$$

$$= \frac{4}{3} \times \frac{22}{7} \times (1)^3$$

$$= \frac{4}{3} \times \frac{22}{7}$$

$$= \frac{88}{21} \text{ cm}^3$$

Number of bullets=

$$\frac{\text{Volume of cube}}{\text{Volume of bullet}}$$

$$= \frac{10648}{\frac{88}{21}}$$

$$= 2541$$

**Q6. A shopkeeper has one laddoo of radius 5 cm. With the same material, how many laddoos of radius 2.5 cm can be made?**

**Sol.**

Volume of laddoo having radius= 5cm

$$\text{i.e Volume}(V_1) = \frac{4}{3}\pi r^3$$

$$(V_1) = \frac{4}{3} \times \frac{22}{7} \times (5)^3$$

$$(V_1) = \frac{11000}{21} \text{ cm}^3$$

Also Volume of laddoo having radius 2.5cm

$$\text{i.e Volume}(V_2) = \frac{4}{3}\pi r^3$$

$$(V_2) = \frac{4}{3} \times \frac{22}{7} \times (2.5)^3$$

$$(V_2) = \frac{1375}{21} \text{ cm}^3$$

$$\text{Therefore number of laddoos} = \frac{V_1}{V_2} = \frac{11000}{1375} = 8$$

**Q7. A spherical ball of lead 3 cm in diameter is melted and recast into three spherical balls. If the diameters of two balls be  $\frac{3}{2}$  cm and 2 cm, find the diameter of the third ball.**

**Sol.**

$$\text{Volume of lead ball} = \frac{4}{3}\pi r^3$$

$$= \frac{4}{3} \times \frac{22}{7} \times \left(\frac{3}{2}\right)^3$$

$$\text{Diameter of first ball } d_1 = \frac{3}{2} \text{ cm}$$

$$\text{Radius of first ball } r_1 = \frac{\frac{3}{2}}{2} = \frac{3}{4} \text{ cm}$$

$$\text{Diameter of second ball } d_2 = 2 \text{ cm}$$

$$\text{Radius of second ball } r_2 = \frac{2}{2} \text{ cm} = 1 \text{ cm}$$

$$\text{Diameter of third ball } d_3 = d$$

$$\text{Radius of third ball } r_3 = \frac{d}{2} \text{ cm}$$

$$\text{Volume of lead ball} = \frac{4}{3}\pi r_1^3 + \frac{4}{3}\pi r_2^3 + \frac{4}{3}\pi r_3^3$$

$$\text{Volume of lead ball} = \frac{4}{3} \times \pi \times \left(\frac{3}{4}\right)^3 + \frac{4}{3} \times \pi \times \left(\frac{2}{2}\right)^3 + \frac{4}{3} \times \pi \times \left(\frac{d}{2}\right)^3$$

$$\frac{4}{3} \times \frac{22}{7} \times \left(\frac{3}{2}\right)^3 = \frac{4}{3} \times \pi \times \left(\frac{3}{4}\right)^3 + \frac{4}{3} \times \pi \times \left(\frac{2}{2}\right)^3 + \frac{4}{3} \times \pi \times \left(\frac{d}{2}\right)^3$$

$$\frac{4}{3} \pi \left[\left(\frac{3}{2}\right)^3\right] = \frac{4}{3} \pi \left[\left(\frac{3}{4}\right)^3 + \left(\frac{2}{2}\right)^3 + \left(\frac{d}{2}\right)^3\right]$$

$$\frac{27}{8} = \frac{27}{64} + 1 + \frac{d^3}{8}$$

$$d^3 = 8 \left[\frac{27}{8} - \frac{27}{64} - 1\right]$$

$$\frac{d^3}{8} = \frac{125}{64}$$

$$\frac{d}{2} = \frac{5}{4}$$

$$d = \frac{10}{4}$$

$$d = 2.5 \text{ cm}$$

**Q8. A sphere of radius 5 cm is immersed in water filled in a cylinder, the level of water rises  $\frac{5}{3}$  cm. Find the radius of the cylinder.**

**Sol.**

Radius of cylinder = r

Radius of sphere = 5cm

$$\text{Volume of sphere} = \frac{4}{3} \pi r^3$$

$$= \frac{4}{3} \times \pi \times (5)^3$$

$$\text{Height of water risen} = \frac{5}{3} \text{ cm}$$

$$\text{Volume of water risen in cylinder} = \pi r^2 h$$

Therefore, Volume of water rises in cylinder = Volume of sphere

Let  $r$  be the radius of the cylinder

$$\pi r^2 h = \frac{4}{3} \pi r^3$$

$$r^2 \times \frac{5}{3} = \frac{4}{3} \times \pi \times (5)^3$$

$$r^2 \times \frac{5}{3} = \frac{4}{3} \times \frac{22}{7} \times 125$$

$$r^2 = 20 \times 5$$

$$r = \sqrt{100}$$

$$r = 10 \text{ cm}$$

**Q9. If the radius of a sphere is doubled, what is the ratio of the volume of the first sphere to that of the second sphere?**

**Sol.**

Let  $v_1$  and  $v_2$  be the volumes of the first and second sphere respectively

Radius of the first sphere =  $r$

Radius of the second sphere =  $2r$

$$\begin{aligned} \text{Therefore, } \frac{\text{Volume of first sphere}}{\text{Volume of second sphere}} &= \frac{\frac{4}{3} \pi r^3}{\frac{4}{3} \pi (2r)^3} \\ &= \frac{1}{8} \end{aligned}$$

**Q10. A cone and a hemisphere have equal bases and equal volumes. Find the ratio of their heights.**

**Sol.**

Given that

Volume of the cone = Volume of the hemisphere

$$\frac{1}{3} \pi r^2 h = \frac{2}{3} \pi r^3$$

$$r^2 h = 2r^3$$

$$h = 2r$$

$$\frac{h}{r} = \frac{1}{1} \times 2 = 2$$

Therefore

Ratio of their heights = 2:1

**Q11. A vessel in the form of a hemispherical bowl is full of water. Its contents are emptied in a right circular cylinder. The internal radii of the bowl and the cylinder are 3.5 cm and 7 cm respectively. Find the height to which the water will rise in the cylinder.**

**Sol.**

Given that

Volume of water in the hemispherical bowl = Volume of water in the cylinder

Let  $h$  be the height to which water rises in the cylinder

Inner radii of the bowl =  $r_1 = 3.5 \text{ cm}$

Inner radii of the bowl =  $r_2 = 7 \text{ cm}$

$$\frac{2}{3} \pi r_1^3 = \pi r_2^2 h$$

$$h = \frac{2r_1^3}{3r_2^2}$$

$$h = \frac{2(3.5)^3}{3(7^2)}$$

$$h = \frac{7}{12} \text{ cm}$$

**Q12. A cylinder whose height is two thirds of its diameter has the same volume as a sphere of radius 4 cm. Calculate the radius of the base of the cylinder.**

**Sol.**

Given that

$$\text{Height of the cylinder} = \frac{2}{3} \text{diameter}$$

We know that

$$\text{Diameter} = 2(\text{radius})$$

$$h = \frac{2}{3} \times 2r = \frac{4}{3}r$$

Volume of the cylinder = Volume of the sphere

$$\pi r^2 h = \frac{4}{3} \pi r^3$$

$$\pi \times r^2 \times \left(\frac{4}{3}r\right) = \frac{4}{3} \pi (4)^3$$

$$(r)^3 = (4)^3$$

$$r = 4 \text{ cm}$$

**Q13. A vessel in the form of a hemispherical bowl is full of water. The contents are emptied into a cylinder. The internal radii of the bowl and cylinder are respectively 6 cm and 4 cm. Find the height of water in the cylinder.**

**Sol.**

It is given that

Volume of water in hemispherical bowl = Volume of cylinder

$$\frac{2}{3} \pi r_1^3 = \pi r_2^2 h$$

$$\frac{2}{3} \pi (6)^3 = \pi (4)^2 h$$

$$h = \frac{2}{3} \times \frac{6 \times 6 \times 6}{4 \times 4}$$

$$h = 9 \text{ cm}$$

**Q14. A cylindrical tub of radius 16 cm contains water to a depth of 30 cm. A spherical iron ball is dropped into the tub and thus level of water is raised by 9 cm. What is the radius of the ball?**

**Sol.**

Let  $r$  be the radius of the iron ball

Radius of the cylinder = 16 cm

Then,

Volume of iron ball = Volume of water raised in the tub

$$\frac{4}{3} \pi r^3 = \pi r^2 h$$

$$\frac{4}{3} r^3 = (16)^2 \times 9$$

$$r^3 = \frac{27 \times 16 \times 16}{4}$$

$$r^3 = 1728$$

$$r = 12 \text{ cm}$$

Therefore radius of the ball = 12 cm.

**Q15. A cylinder of radius 12 cm contains water to a depth of 20 cm. A spherical iron ball is dropped into the cylinder and thus the level of water is raised by 6.75 cm. Find the radius of the ball. (Use =  $\frac{22}{7}$ ).**

**Sol.**

Given that:

Radius of the cylinder = 12 cm =  $r_1$

Raised in = 6.75 cm =  $r_2$

Volume of water raised = Volume of the sphere

$$= \pi r_1^2 h = \frac{4}{3} \pi r_2^3$$

$$= 12 \times 12 \times 6.75 = \frac{4}{3} r_2^3$$

$$= r_2^3 = \frac{12 \times 12 \times 6.75 \times 3}{4}$$

$$= r_2^3 = 729$$

$$= r_2 = 9 \text{ cm}$$

Radius of the sphere is 9cm

**Q16. The diameter of a copper sphere is 18 cm. The sphere is melted and is drawn into a long wire of uniform circular cross-section. If the length of the wire is 108 m, find its diameter.**

**Sol.**

Given that diameter of a copper sphere=18cm

Radius of the sphere= 9cm

Length of the wire=108m=10800cm

Volume of cylinder= Volume of sphere

$$\pi r_1^2 h = \frac{4}{3} \pi r_2^3$$

$$r_1^2 \times 10800 = \frac{4}{3} \times 9 \times 9 \times 9$$

$$r_1^2 = 0.009$$

$$r_1 = 0.3 \text{ cm}$$

$$\text{Therefore Diameter} = 2 \times 0.3 = 0.6 \text{ cm}$$

**Q17. A cylindrical jar of radius 6 cm contains oil. Iron spheres each of radius 1.5 cm are immersed in the oil. How many spheres are necessary to raise the level of the oil by two centimeters?**

**Sol.**

Given that,

Radius of the cylinder jar=6cm= $r_1$

Level to be raised=2cm

Radius of each iron sphere=1.5cm= $r_2$

$$\text{Number of sphere} = \frac{\text{Volume of cylinder}}{\text{Volume of sphere}}$$

$$= \frac{\pi r_1^2 h}{\frac{4}{3} \pi r_2^3}$$

$$= \frac{r_1^2 h}{\frac{4}{3} r_2^3}$$

$$= \frac{6 \times 6 \times 2}{\frac{4}{3} \times 1.5 \times 1.5 \times 1.5}$$

$$\text{Number of sphere} = 16$$

**Q18. A measuring jar of internal diameter 10 cm is partially filled with water. Four equal spherical balls of diameter 2 cm each are dropped in it and they sink down in water completely. What will be the change in the level of water in the jar?**

**Sol.**

Given that,

Diameter of jar=10cm

Radius of jar=5cm

Let the level of water be raised by h

Diameter of the spherical bowl=2cm

Radius of the ball=1cm

Volume of jar=4(Volume of spherical ball)

$$\pi r_1^2 h = 4 \left( \frac{4}{3} \pi r_2^3 \right)$$

$$r_1^2 h = 4 \left( \frac{4}{3} r_2^3 \right)$$

$$5 \times 5 \times h = 4 \times \frac{4}{3} \times 1^3$$

$$5 \times 5 \times h = 4 \times \frac{4}{3} \times 1 \times 1 \times 1$$

$$h = \frac{4 \times 4 \times 1}{3 \times 5 \times 5}$$

$$h = \frac{16}{75} \text{ cm}$$

$$\text{Height of water in jar} = \frac{16}{75} \text{ cm}$$

**Q19. The diameter of a sphere is 6 cm. It is melted and drawn into a wire of diameter 0.2 cm. Find the length of the wire.**

**Sol.**

Given that

Diameter of sphere=6cm

$$\text{Radius of sphere} = \frac{d}{2} = \frac{6}{2} = 3\text{cm} = r_1$$

$$\text{Diameter of the wire} = 0.2\text{cm}$$

$$\text{Radius of the wire} = 0.1\text{cm} = r_2$$

Volume of sphere=Volume of wire

$$\frac{4}{3}\pi r_1^3 = \pi r_2^2 h$$

$$= \frac{4}{3} \times 3 \times 3 \times 3 = 0.1 \times 0.1 \times h$$

$$h = \frac{4 \times 3 \times 3}{0.1 \times 0.1}$$

$$h = 3600\text{cm}$$

$$h = 36\text{m}$$

Therefore length of wire=36m

**Q20. The radius of the internal and external surfaces of a hollow spherical shell are 3 cm and 5 cm respectively. If it is melted and recast into a solid cylinder of height  $22\frac{2}{3}$ cm. Find the diameter of the cylinder.**

**Sol.**

Given that,

Internal radius of the sphere=3cm= $r_1$

External radius of the sphere=5cm= $r_2$

$$\text{Height of the cylinder} = \frac{8}{3}\text{cm} = h$$

Volume of the spherical shell = Volume of cylinder

$$\frac{4}{3}\pi (r_2^3 - r_1^3) = \pi r_3^2 h$$

$$\frac{4}{3}(5^3 - 3^3) = \frac{8}{3}r_3^2$$

$$r_3^2 = \frac{4 \times 98 \times 3}{3 \times 8}$$

$$r_3 = \sqrt{49}$$

$$r_3 = 7\text{cm}$$

Therefore diameter of the cylinder=2(radius)=14cm

**Q21. A hemisphere of the lead of radius 7 cm is cast into a right circular cone of height 49 cm. Find the radius of the base.**

**Sol.**

Given

Radius of the hemisphere=Volume of cone

$$\frac{2}{3}\pi r_1^3 = \frac{1}{3}\pi r_2^2 h$$

$$\frac{2}{3} \times 7^3 = \frac{1}{3}r_2^2 \times 49$$

$$r_2^2 = \frac{2 \times 7 \times 7 \times 7 \times 3}{3 \times 49}$$

$$r_2^2 = \frac{2058}{147}$$

$$r_2 = 3.47\text{cm}$$

Therefore radius of the base=3.74cm

**Q22. A hollow sphere of internal and external radii 2cm and 4 cm respectively is melted into a cone of base radius 4cm. Find the height and slant height of the cone.**

**Sol.**

Given that

Hollow sphere external radii= $r_2$ =4cm

Internal radii= $r_1$ =2cm

Cone base radius(R)=4cm

Height=h

Volume of cone=Volume of sphere

$$\frac{1}{3}\pi r^2 h = \frac{4}{3}\pi (r_2^2 - r_1^2)$$

$$4^2 h = 4 (4^3 - 2^3)$$

$$h = \frac{4 \times 56}{16}$$

$$h = 14 \text{ cm}$$

$$\text{Slant height } (l) = \sqrt{r^2 + h^2}$$

$$\text{Slant height } (l) = \sqrt{r_2^2 + h^2}$$

$$l = \sqrt{4^2 + (14^2)}$$

$$l = \sqrt{16 + 196}$$

$$l = \sqrt{212}$$

$$l = 14.56 \text{ cm}$$

**Q23. A metallic sphere of radius 10.5 cm is melted and thus recast into small cones, each of radius 3.5 cm and height 3 cm. Find how many cones are obtained.**

**Sol.**

Given that

Metallic sphere of radius=10.5cm

Cone radius=3.5cm

Height of radius=3cm

Let the number of cones obtained be x

$$v_s = x \times v_{\text{cone}}$$

$$\frac{4}{3}\pi r^3 = x \times \frac{1}{3}\pi r^2 h$$

$$x = \frac{4 \times 10.5 \times 10.5 \times 10.5}{3.5 \times 3.5 \times 3}$$

$$x = 126$$

Therefore number of cones=126

**Q24. A cone and a hemisphere have equal bases and equal volumes. Find the ratio of their heights.**

**Sol.**

Given that

A cone and a hemisphere have equal bases and volumes

$$v_{\text{cone}} = v_{\text{hemisphere}}$$

$$\frac{1}{3}\pi r^2 h = \frac{2}{3}\pi r^3$$

$$r^2 h = 2r^3$$

$$h = 2r$$

$$\frac{h}{r} = \frac{2}{1}$$

$$h : r = 2 : 1$$

Therefore the ratio is 2:1

**Q25. A cone, a hemisphere, and a cylinder stand on equal bases and have the same height. Show that their volumes are in the ratio 1 : 2 : 3.**

**Sol.**

Given that

A cone, a hemisphere and a cylinder stand on one equal bases and have the same weight

We know that

$$v_{\text{cone}} : v_{\text{hemisphere}} : v_{\text{cylinder}}$$

$$\frac{1}{3}\pi r^2 h : \frac{2}{3}\pi r^3 : \pi r^2 h$$

*multiplying by 3*

$$\pi r^2 h : 2\pi r^3 : 3\pi r^2 h$$

$$\pi r^3 : 2\pi r^3 : 3\pi r^3 (\because r = h \text{ and } r^2 h = r^3)$$

$$1 : 2 : 3$$

*Therefore the ratio is 1 : 2 : 3*

**Q26. A cylindrical tub of radius 12 cm contains water to a depth of 20 cm. A spherical form ball is dropped into the tub and thus the level of water is raised by 6.75 cm. What is the radius of the ball?**

**Sol.**

Radius of cylindrical tub=12cm

Depth=20cm

Let r be the radius of the ball

Then

Volume of the ball= Volume of water raised

$$\frac{4}{3}\pi r^3 = \pi r^2 h$$

$$r^3 = \frac{3.14 \times (12)^2 \times 6.75 \times 3}{4}$$

$$r^3 = 729$$

$$r = \sqrt[3]{729}$$

$$r = 9\text{cm}$$

Therefore radius of the ball=9cm

**Q27. The largest sphere is carved out of a cube of side 10.5 cm. Find the volume of the sphere.**

**Sol.**

Side of cube=10.5cm

Volume of sphere=v

Diameter of the largest sphere=10.5cm

$$2r=10.5$$

$$r=5.25\text{cm}$$

$$\text{Volume of sphere} = \frac{4}{3}\pi r^3 = \frac{4}{3} \times \frac{22}{7} \times 5.25 \times 5.25 \times 5.25$$

$$v = \frac{11 \times 441}{8} \text{cm}^3$$

$$v = 606.375\text{cm}^3$$

**Q28. A sphere, a cylinder, and a cone have the same diameter. The height of the cylinder and also the cone are equal to the diameter of the sphere. Find the ratio of their volumes.**

**Sol.**

Let r be the common radius

Height of the cone=height of the cylinder=2r

Let

$$v_1 = \text{Volume of sphere} = \frac{4}{3}\pi r^3$$

$$v_2 = \text{Volume of cylinder} = \pi r^2 h = \pi r^2 \times 2r$$

$$v_3 = \text{Volume of cone} = \frac{1}{3}\pi r^2 h = \frac{1}{3}\pi r^3$$

Now

$$v_1 : v_2 : v_3 = \frac{4}{3}\pi r^3 : 2\pi r^3 : \frac{2}{3}\pi r^3$$

$$= 4 : 6 : 2$$

$$= 2 : 3 : 1$$

**Q29. A cube of side 4 cm contains a sphere touching its side. Find the volume of the gap in between.**

**Sol.**

It is given that

Cube side=4cm

$$\text{Volume of cube} = (4\text{cm})^3 = 64\text{cm}^3$$

Diameter of the sphere= Length of the side of the cube=4cm

Therefore radius of the sphere=2cm

$$\text{Volume of the sphere} = \frac{4}{3}\pi r^3 =$$

$$\frac{4}{3} \times \frac{22}{7} \times (2)^3 = 33.52\text{cm}^3$$

Volume of gap=Volume of cube-Volume of sphere

$$= 64\text{cm}^3 - 33.52\text{cm}^3 = 30.48\text{cm}^3$$



**Q30. A hemispherical tank is made up of an iron sheet 1 cm thick. If the inner radius is 1 m, then find the volume of the iron used to make the tank.**

**Sol.**

Given that,

Inner radius of the hemispherical tank = 1 m =  $r_1$

Thickness of the hemispherical tank = 1 cm = 0.01 m

Outer radius of hemispherical tank = (1 + 0.01) = 1.01 m =  $r_2$

Volume of iron used to make the tank =

$$\begin{aligned} & \frac{2}{3} \pi (r_2^3 - r_1^3) \\ &= \frac{2}{3} \times \frac{22}{7} [(1.01)^3 - 1^3] \\ &= \frac{44}{21} [(1.0303) - 1] m^3 \\ &= 0.06348 m^3 \end{aligned}$$

**Q31. A capsule of medicine is in the shape of a sphere of diameter 3.5 mm. How much medicine ( $mm^3$ ) is needed to fill this capsule?**

**Sol.**

Given that

Diameter of capsule = 3.5 mm

$$\text{Radius} = \frac{3.5}{2} = 1.75 \text{ mm}$$

Volume of spherical sphere =

$$\begin{aligned} & \frac{4}{3} \pi r^3 \\ &= \frac{4}{3} \times \frac{22}{7} \times (1.75)^3 \\ &= 22.458 mm^3 \end{aligned}$$

Therefore 22.46  $mm^3$  of medicine is required

**Q32. The diameter of the moon is approximately one-fourth of the diameter of the earth. What is the earth the volume of the moon?**

**Sol.**

Diameter of moon =  $\frac{1}{4}$  th diameter of earth

Let the diameter of earth be d, so radius =  $\frac{d}{2}$

Then diameter of moon =  $\frac{d}{4}$

$$\text{Radius} = \frac{\frac{d}{4}}{2} = \frac{d}{8}$$

$$\text{Volume of moon} = \frac{4}{3} \pi r^3 = \frac{4}{3} \pi \left( \frac{d}{8} \right)^3 = \frac{4}{3} \times \frac{1}{512} \pi d^3$$

$$\text{Volume of earth} = \frac{4}{3} \pi r^3 = \frac{4}{3} \pi \left( \frac{d}{2} \right)^3 = \frac{4}{3} \times \frac{1}{8} \pi d^3$$

$$\frac{\text{Volume of moon}}{\text{Volume of earth}} = \frac{\frac{4}{3} \times \frac{1}{512} \pi d^3}{\frac{4}{3} \times \frac{1}{8} \pi d^3}$$

$$= \frac{1}{64}$$

Thus the volume of the moon is  $\frac{1}{64}$  of volume of earth